



MINISTRY OF EDUCATION

***CATALOGUE OF EXAM QUESTIONS
FOR PASSING THE THEORETICAL PART
OF DRIVING TEST***

Podgorica, may 2023.

- **Interruption of the movement of a vehicle lasting more than five minutes, except for an interruption that is performed in order to act according to a sign or rule regulating traffic is:**
 - * stopping the vehicle ☐
 - * vehicle parking ☐
 - * vehicle shutdown ☐

- **The speed of buses in public urban passenger transport is limited to:**
 - * 50 km/h ☐
 - * 60 km/h ☐
 - * 70 km/h ☐

- **Instead of an audible warning sign at night, the driver may use:**
 - * daytime running lights ☐
 - * light warning ☐
 - * fog lights ☐

- **Area not intended for vehicle traffic, located in the middle of the road with one-way traffic, unless otherwise specified by the traffic sign:**
 - * can be bypassed on the left or right side ☐
 - * can be bypassed only on the right side ☐
 - * can be bypassed only on the left side ☐

- **On the road for vehicle traffic in both directions on which there are three traffic lanes driver:**
 - * may use any traffic lane ☐
 - * must not use the traffic lane along the right edge of the road ☐
 - * must not use the traffic lane along the left edge of the road ☐

- **At the intersection, the driver is obliged to:**
 - * to pass a vehicle coming from his left ☐
 - * to miss a vehicle coming from his right side ☐
 - * to pass all vehicles ☐

- **The distance between the towing and towed passenger vehicle, if towed by rope, is:**
 - * from 1 to 2 meters ☐
 - * from 3 to 5 meters ☐
 - * over 5 meters ☐

- **In a vehicle fitted with safety belts while driving, the safety belt must be used by:**
 - * driver only ☐
 - * driver and passengers ☐
 - * driver and front passenger only ☐

- **When the vehicle for organized transport of children is stopped on the road for the entry or exit of children, the driver:**
 - * must turn on the left turn signal ☐
 - * must turn on the right turn signal ☐
 - * must include all direction indicators ☐

- **The longitudinal part of the road intended for one-way traffic with one or more traffic lanes is called:**
 - * traffic lane..... ☐
 - * lane..... ☐
 - * roadway..... ☐

- **When an authorized police officer gives orders that deviate from traffic rules, the traffic participant:**
 - * is obliged to act on the orders of the authorized police officer ☐
 - * is obliged to act according to the traffic rules ☐
 - * is not obliged to act on the orders of the authorized police officer ☐

- If a child is not transported in a safety seat, in a motor vehicle in the front seat, child may not be transported if he/she is:
 - * younger than - years ☐
 - * younger than 12 years ☐
 - * under the age of 14 ☐

- Reversing of vehicles in conditions of reduced visibility:
 - * is allowed in the settlement ☐
 - * allowed on a short part of the road ☐
 - * not allowed ☐

- In the settlement, the speed of movement of motor vehicles may be allowed by a traffic sign to the speed of up to:
 - * 80 km / h ☐
 - * 50 km / h ☐
 - * 60 km / h ☐

- When the driver encounters an organized colon of pedestrians crossing the road, he:
 - * must not cross an organized colon of pedestrians with a vehicle ☐
 - * is allowed to cross an organized colon of pedestrians with a vehicle with the use of an audible warning sign.. ☐
 - * is allowed to cross an organized colon of pedestrians with a vehicle, if the colon is not made up of children ☐

- In the towed motor vehicle, except for the driver who drives it:
 - * transport of passengers is allowed in accordance with the number of passenger seats ☐
 - * only one passenger is allowed to be transported ☐
 - * the transport of passengers is prohibited ☐

- **The crossing of a vehicle from one traffic lane intended for traffic in the same direction is:**
 - * changing lanes ☐
 - * overtaking ☐
 - * tour ☐

- **A young driver and a novice driver must not drive on the motorway at speeds higher than:**
 - * 70 km/h ☐
 - * -0 km/h ☐
 - * 1- km/h ☐

- **Is the traffic participant obliged to act in accordance with the traffic signals and when he deviates from the traffic rules:**
 - * is not obliged ☐
 - * is obliged ☐
 - * he is obliged only in the settlement ☐

- **Sudden change of vehicle speed on the road is allowed:**
 - * in case of inclusion from a dirt road to a public road ☐
 - * in case of avoiding imminent danger ☐
 - * in case of faster disconnection from traffic ☐

- **In addition to tractors, other motor vehicles:**
 - * must not tow a tractor trailer ☐
 - * are allowed to tow a tractor trailer ☐
 - * they must not tow a tractor trailer if the mass of the combination vehicle exceeds 3,500 kg ☐

- **The driver is obliged to use an audible warning sign:**
 - * before entering a tunnel without lighting ☐
 - * on the way to the settlements before entering the intersection ☐
 - * on the road outside the settlement before encountering an endless and narrow curve ☐

- **There are horizontal and traffic lights at the intersection, the driver will act according to:**
 - * the rule of passing vehicles from the right side ☐
 - * the meaning of light signaling ☐
 - * road markings ☐

- **A young driver may not drive, except on the motorway, at a speed exceeding:**
 - * -0 km/h ☐
 - * 80 km/h ☐
 - * 70 km/h ☐

- **A driver approaching a marked pedestrian crossing must:**
 - * reduce the speed of the vehicle to 30 km / h ☐
 - * reduce the speed and continue driving with the vehicle regardless of the traffic situation ☐
 - * adjust the speed of the vehicle so that it can be stopped safely in any situation ☐

- **The speed of a freight motor vehicle with a maximum permissible mass of up to 7,500 kg is limited to:**
 - * 80 km/h ☐
 - * 70 km/h ☐
 - * 60 km/h ☐

- **The distance at which a road user can clearly see the road is:**
 - * transparency ☐
 - * field of view ☐
 - * visibility ☐

- **For cycling, where there is no special path or lane, the following road may be used:**
 - * up to 1 meter wide from the right edge of the road ☐
 - * up to -5 meters wide from the right edge of the road ☐
 - * up to -2 meters wide from the right edge of the road ☐

- **The speed of vehicles on public roads when transporting dangerous goods outside the settlement is limited:**
 - * at 60 km / h ☐
 - * at 70 km / h ☐
 - * at 80 km / h ☐

- **The driver may join the traffic with his vehicle when he:**
 - * turns on the audible signal and all direction indicators ☐
 - * turns on only the direction indicator ☐
 - * makes sure that it does not interfere and inform the other participants in the prescribed manner ☐

- **Passing a vehicle next to another vehicle that does not move is the action:**
 - * overtaking ☐
 - * visits ☐
 - * rearrangements ☐

- **The speed of movement of a truck with a trailer is limited to:**
 - * 60 km/h ☐
 - * 70 km/h ☐
 - * 80 km/h ☐

- **Driver to whom has been given an overtaking signal:**
 - * is obliged to move his vehicle towards the right edge of the road ☐
 - * is obliged to move his vehicle towards the dividing line ☐
 - * is obliged to move the vehicle to the left edge of the road ☐

- **Are escorted vehicles allowed to cross a colon of pedestrians:**
 - * no, if the colon is longer than 30 meters ☐
 - * no, regardless of the length of the colon ☐
 - * yes, regardless of the length of the colon ☐

- **In the caravan – camping truck:**
 - * persons may be transported ☐
 - * persons may not be transported ☐
 - * no more than five persons may be transported ☐

- **The load on a motor vehicle may exceed the farthest point on the front of the vehicle for:**
 - * up to -5 meters ☐
 - * up to 1 meter ☐
 - * is not limited, but must be marked with the prescribed board ☐

- **Reversing is permitted:**
 - * on a short part of the road in an opaque curve ☐
 - * on a short part of the road in the tunnel ☐
 - * on a short part of the road ☐

- **On the main road outside the settlement, where there is no sign of speed limit, the driver must not move the vehicle at a speed higher than:**
 - * 60 km/h ☐
 - * 70 km/h ☐
 - * 80 km/h ☐

- **Passing with a vehicle next to another vehicle coming from the opposite direction is an action:**
 - * overtaking ☐
 - * passing ☐
 - * bypassing ☐

- **The driver is obliged to remove from the road without delay:**
 - * all items that are on the road ☐
 - * objects and substances originating from the vehicle he drives ☐
 - * all objects that are on the traffic lane on which it moves ☐

- **Two vests with light-reflecting properties must be in the:**
 - * passenger motor vehicle ☐
 - * quad bike ☐
 - * cargo motor vehicle ☐

- **Driver on the road for vehicle traffic in both directions where there are at least four traffic lanes:**
 - * must use the right lane ☐
 - * must use only the right lane ☐
 - * must use only the left lane ☐

- **The speed of motor vehicles on the road, under normal traffic conditions, must not be limited by the traffic sign below:**
 - * 40 km/h ☐
 - * 50 km/h ☐
 - * 60 km/h ☐

- **On a road on which there are two traffic lanes intended for the traffic of vehicles in the same direction, faster movement of vehicles in one lane than movement of vehicles in the other lane:**
 - * is considered an overtaking ☐
 - * is not considered an overtaking ☐
 - * is considered a tour ☐

- **A motor vehicle towing a defective vehicle on the road must not move at a speed higher than:**
 - * 40 km/h ☐
 - * 50 km/h ☐
 - * 60 km/h ☐

- **The traffic lane intended for the movement of vehicles for public passenger transport may be used by:**
 - * escorted vehicles ☐
 - * utility vehicles ☐
 - * passenger vehicles ☐

- **The driver is obliged to give an audible warning sign:**
 - * several times in alternating intervals ☐
 - * without interruption for 5 seconds ☐
 - * to the extent sufficient to warn other road users ☐

- **A pedestrian island located in the middle of the road, where traffic flows in both directions, shall be bypassed by vehicle:**
 - * always on the right ☐
 - * always on the left ☐
 - * from either side ☐

- **On the road with priority of passage directly in front of the intersection which is not regulated by traffic lights or traffic signs, the driver:**
 - * can bypass a bicycle, moped or motorcycle ☐
 - * can bypass all vehicles that maintain the direction of movement ☐
 - * can bypass passenger vehicles that maintain the direction of movement ☐

- **The driver is obliged to use the audible warning sign on a public road:**
 - * when catching up with vehicles moving slowly downhill ☐
 - * when passing a vehicle parked on the right side of the road ☐
 - * when there are children next to the road who do not pay attention to the movement of the driver ☐

- **The driver of a vehicle while being overtaken by another vehicle:**
 - * must not increase the speed of movement ☐
 - * may increase the speed of movement ☐
 - * must not reduce the speed of movement ☐

- **When vehicles come from opposite directions at the intersection and turn left, they pass by:**
 - * right side ☐
 - * left side ☐
 - * left and right sides ☐

- **A young driver is a driver:**
 - * who has less than 12 months of driving experience ☐
 - * who has up to 24 years of age ☐
 - * who has up to 21 years of age ☐

- **If you come across a “children on the road” traffic sign while driving, you will do the following:**
 - * continue to move with special caution so that they can stop the vehicle in time..... ☐
 - * adjust the speed according to the general limit for a given section of road..... ☐
 - * adjust the speed to the weather conditions..... ☐

- **When you drive next to a bus stopped at a stop, you will do the following:**
 - * you will stop the vehicle and wait for the passenger to enter the bus, and then continue moving ☐
 - * you will turn on the siren and continue moving without additional attention to the persons entering or leaving the bus ☐
 - * I will move at a reduced speed so as not to endanger the persons entering or leaving the bus ☐

- **The driver while driving a passenger motor vehicle in traffic must in the vehicle:**
 - * have at least two vests with reflective properties ☐
 - * have a vest with reflective features as much as there are seats ☐
 - * have one vest with reflective properties ☐

- **On a road in a settlement where the speed is not limited by a traffic sign, the driver must not move faster than:**
 - * 50 km/h ☐
 - * 60 km/h ☐
 - * 70 km/h ☐

- **When the driver turns on the vehicle from the dirt road to the road with asphalt curtain, it is necessary:**
 - * to stop the vehicle and remove the mud from the wheels after turning on ☐
 - * to alternately accelerate and reduce the speed of the vehicle after turning on, so that the mud falls off the wheels ☐
 - * to stop the vehicle and remove the mud from the wheels before turning on ☐

- **When moving the vehicle on the road, the driver is obliged to keep the vehicle:**
 - * as close as possible to the right edge of the road ☐
 - * in the middle of the carriageway ☐
 - * closer to the dividing line ☐

- **The traffic lane intended for the movement of vehicles for urban passenger transport may be used by:**
 - * garbage collection vehicles ☐
 - * vehicles with passage prevention ☐
 - * overtaking passenger vehicles ☐

- **When a convoy of vehicles is formed behind the vehicle due to slow driving, the driver is obliged to:**
 - * continue to move without obligation towards other traffic participants ☐
 - * in an appropriate place on the road, enable vehicles to safely overtake, bypass or pass it ☐
 - * continue driving to the first intersection with the local road and disconnect from traffic ☐

- **The following must be included during the movement during fog on the vehicle:**
 - * high beams ☐
 - * dipped headlights ☐
 - * direction indicators ☐

- **A driver approaching an intersection is obliged to:**
 - * increase the speed of movement to pass through the intersection as quickly as possible ☐
 - * adjust driving to traffic conditions at intersections ☐
 - * drives at the speed prescribed by the general limit ☐

- **A driver may stop or park his vehicle on the sidewalk:**
 - * if the sidewalk has a width greater than -6 meters ☐
 - * if traffic sign are allowing it, regardless of the width of the sidewalk and pedestrian passage ☐
 - * if traffic signals are allowing it, and if there is a pedestrian crossing at least -6 wide, which cannot be located next to the edge of the road ☐

- **Turning the vehicle by 180 ° from the previous direction of movement in order to join the opposite traffic flow is:**
 - * circular rotation ☐
 - * left turn... ☐
 - * semicircular rotation ☐

- **A young driver on the main road must not drive at a speed higher than:**
 - * 50 km/h ☐
 - * 60 km/h ☐
 - * 70 km/h ☐

- **At night, the driver may use a warning light on the road in the settlement, when:**
 - * passing with another vehicle ☐
 - * passing by a pedestrian ☐
 - * overtaking of another vehicle ☐

- **Up to how old is the child to be transported in the safety seat, ie basket:**
 - * ☐
 - * ☐
 - * ☐

- **When passing by a pedestrian, the driver is obliged to:**
 - * keeps a safe distance between his vehicle and the pedestrian ☐
 - * warn the pedestrian with a siren so that the pedestrian leaves the road ☐
 - * speed up the vehicle to pass the pedestrian as soon as possible ☐

- **The distance between the towing and towed motor vehicle, if towed by rigid connection, shall include:**
 - * from 3 to 5 meters ☐
 - * over 5 meters ☐
 - * up to 3 m ☐

- **A category B driving license may be issued to a person who has:**
 - * 17 years ☐
 - * 17 years and 6 months ☐
 - * 18 years ☐

- **A driver who stops or parks a vehicle on a road without street lighting, at night or in conditions of reduced visibility, must turn on on the vehicle the:**
 - * dipped headlights ☐
 - * parking or position lights ☐
 - * fog lights ☐

- **If the driver is on the road outside his vehicle, he:**
 - * is obliged to wear a vest with light-reflecting properties ☐
 - * is not obliged to wear a vest with light-reflecting properties ☐
 - * is obliged to warn other participants about his presence with the position of his hands ☐

- **A vehicle moving on rails placed along the right edge of the carriageway shall overtake:**
 - * from any side ☐
 - * on the left ☐
 - * on the right side ☐

- **During reversing:**
 - * all direction indicators must be turned on ☐
 - * not all direction indicators need to be turned on ☐
 - * only the right turn signal must be turned on ☐

- **When transporting a child in a security seat:**
 - * the child does not have to be wearing a seat belt ☐
 - * the child does not have to be restrained, if the seat is fastened with a seat belt ☐
 - * the child must be fastened with a seat belt ☐

- **On a public road where the carriageways are physically separated, the driver may move the vehicle:**
 - * a carriageway intended for the traffic of vehicles from the opposite direction ☐
 - * right lane ☐
 - * left and right lane ☐

- **A person transported by vehicle may not:**
 - * write messages on a telephone device ☐
 - * interfere with the driver's driving ☐
 - * use headphones ☐

- **When the vehicle moves backwards, the driver:**
 - * is obliged to pass the vehicle coming behind his vehicle ☐
 - * is obliged to turn on the left direction indicator ☐
 - * is not obliged to pass the vehicle coming behind his vehicle... ☐

- **Means which interfere with the operation of the device for measuring the speed of movement of the vehicle:**
 - * must not be used on the part of the road where there is an additional radar control board ☐
 - * may be used on the part of the road where there is no additional radar control board ☐
 - * must not be used and kept in the vehicle ☐

- **In the settlement, to motor vehicles the speed of movement may be limited by a traffic sign to up to:**
 - * 80 km/h..... ☐
 - * 50 km/h..... ☐
 - * 60 km/h ☐

- **The driver of a vehicle for organized transport of children when stopping the vehicle on the road for the entry and exit of children must:**
 - * turn on the left turn signal ☐
 - * turn on all direction indicators ☐
 - * turn on the right turn signal ☐

- **When vehicles come to the intersection from opposite directions and turn left, they pass by:**
 - * on the right ☐
 - * on the left ☐
 - * by agreement ☐

- **When entering traffic, the driver is obliged to:**
 - * to use an audible warning sign and to include an appropriate direction indicator..... ☐
 - * to include all direction indicators ☐
 - * to ensure that it can do so in a safe manner and to include an appropriate direction indicator ☐

- **Vehicle moving on rails laid in the middle of the road:**
 - * may overtake the road on the right ☐
 - * may overtake the road on the left ☐
 - * must not overtake ☐

- **A motor vehicle must not tow:**
 - * motorcycle, moped, as well as light and heavy tricycle ☐
 - * truck ☐
 - * passenger vehicle ☐

- **Pedestrian on a public road outside the settlement:**
 - * must not move on the right side of the road ☐
 - * must not move in a column ☐
 - * must not move on the carriageway of the highway ☐

- **Vehicle moving on rails laid in the middle of the road:**
 - * may overtake on the left ☐
 - * may be overtaken from any side ☐
 - * may overtake on the right ☐

- Is the driver allowed to make a semicircular turn on a fast road:
 - * yes, if it does not endanger other traffic participants ☐
 - * yes, if all direction indicators are on ☐
 - * it is prohibited ☐

- Red and blue flashing lights that alternately light up on the vehicle are light signals given by:
 - * vehicles with priority of passage ☐
 - * escorted vehicles ☐
 - * special vehicles ☐



- **In the situation shown in the picture the driver:**
 - * vehicle 1 should miss vehicle 2 ☐
 - * vehicle 2 should accelerate and pass in front of vehicle 1 .. ☐
 - * vehicle 2 should miss vehicle 1 ☐

- **In the situation shown in the picture vehicle 1:**
 - * must not stop or park ☐
 - * may be stopped ☐
 - * may be stopped or parked ☐



- **How will you act in the situation shown in the picture:**
 - * I will stop in front of the intersection ☐
 - * I will pass vehicles from the opposite direction and continue moving..... ☐
 - * I will continue to move without passing vehicles from the opposite direction..... ☐


- **In the situation shown in the picture, cyclists move:**
 - * improper, because they made a column ☐
 - * improper, because they do not wear a vest with reflective properties..... ☐
 - * properly ☐



- **How will you act in the situation shown in the picture, when a police officer with outstretched arms and body facing vehicles 2 and 3 regulates traffic:**
 - * I will miss only vehicles 2 and 3 ☐
 - * I will miss only vehicle 4 and continue moving ☐
 - * I will continue to move without missing vehicles 2, 3 and 4 ☐

- **In the situation shown in the picture, the order of passage of vehicles allowed to pass is:**

☐



- **How will you act in the situation shown in the picture:**
 - * I will continue to move without passing the vehicle ☐
 - * I will not miss the vehicle 3 ☐
 - * I will miss vehicles 2 and 3 ☐

- **In the situation shown in the picture with vehicle 4:**
 - * I pass on the right ☐
 - * I pass on the left ☐
 - * I go around on the right ☐




- **How will you act in the situation shown in the picture:**
 - * I will continue to move straight through the intersection because it is green light at the traffic light..... ☐
 - * I will not enter the intersection due to traffic density ☐
 - * I will continue to move to the right through the intersection ☐

- **In the situation shown in the picture:**
 - * I am allowed to make a semicircular turn ☐
 - * I can stop at the intersection ☐
 - * I am not allowed to turn the vehicle in a semicircle ☐



- **How will you act in the situation shown in the picture:**
 - * I will stop in front of the intersection because of the STOP sign ☐
 - * I will continue to move, because I keep the direction ☐
 - * I will stop in front of the intersection because of the traffic light ☐

- **In the situation shown in the picture, the passage through the intersection is regulated by:**
 - * illuminated traffic sign ☐
 - * the rule of the right side ☐
 - * traffic sign ☐




- **How will you act in the situation shown in the picture:**
 - * I will continue to move to the left after passing the vehicle 3 ☐
 - * I will continue to move to the left without passing vehicles 2 and 3 ☐
 - * I will stop and miss vehicles 2 and 3 ☐

- **In the situation shown in the picture, the order of passing the vehicle is:**☐



- **In the situation shown in the picture vehicle:**
 - * 1 should continue to move without passing the vehicle 2 .. ☐
 - * 2 should miss vehicle 1 and continue moving ☐
 - * 1 should miss vehicle 2 and continue moving ☐

- **In the situation shown in the picture, the driver of vehicle 1 will act according to:**
 - * the rule of passing vehicles only on the right side ☐
 - * the rule of passing through an unregulated intersection ☐
 - * traffic sign ☐



- **What will you do in the following situation:**
 - * I will continue to move straight without passing the tram... ☐
 - * I will continue to move straight after the tram passes ☐
 - * I will stop and miss the tram ☐
- **In the situation shown in the picture, the passage of vehicles through the intersection is regulated by:**
 - * vertical traffic signals ☐
 - * the advantage of passing a rail vehicle ☐
 - * the rule of passing vehicles only on the right side ☐




- **In the situation shown in the picture:**
 - * passenger vehicle 1 has permitted passage ☐
 - * vehicles 2, 3 and 4 have permitted passage ☐
 - * only police vehicle 4 has permitted passage ☐
- **In the situation shown in the picture, the police vehicle 4:**
 - * can continue to move straight ☐
 - * must be stopped ☐
 - * may continue to move straight after the vehicle 1 has passed ☐



- **How will you act in the situation shown in the picture, if you are driving vehicle 1:**
 - * after passing vehicle 2 I have to turn right ☐
 - * I have priority of passage in relation to vehicle 2 ☐
 - * I will stop in front of the intersection and miss all vehicles ☐
- **Mandatory direction to the right, in the situation in the picture, refers to:**
 - * trucks and trailers ☐
 - * all vehicles except trucks ☐
 - * trucks ☐




- **How will you act in the situation shown in the picture:**
 - * I will pass a vehicle that turns left ☐
 - * I will continue to move straight because I have the right of way ☐
 - * I will stop in front of the intersection because of the STOP sign ☐
- **In the situation shown in the picture, you will proceed according to the:**
 - * traffic sign STOP ☐
 - * the meaning of the light signs on the traffic light ☐
 - * traffic rule of entering an unregulated intersection ☐



- In the situation shown in the picture, the order of passing of the vehicle is:
 ☐

- In the situation shown in the picture, the order of passing through the intersection is regulated by:
 * traffic sign ☐
 * the rule of passing the vehicle on the right side ☐
 * horizontal markings ☐




- In the situation shown in the picture when turning left you should:
 * continue to move without missing vehicles 2, 3 and 4 ☐
 * I miss vehicles 3 and 4 ☐
 * I miss vehicles 2, 3 and 4 ☐

- In the situation shown in the picture, the arrows on the road (white) indicate:
 * routing line ☐
 * mandatory direction only for passenger vehicles ☐
 * obligatory direction of movement ☐



- How will you act in the situation shown in the picture:
 * I will continue to move straight without passing the tram ☐
 * I will continue to move straight after the tram passes ☐
 * with increased caution I will continue to move straight ... ☐
- In the situation shown in the picture, the order of passing through the intersection is regulated by:
 * vertical signaling ☐
 * by applying the rules of the right side ☐
 * by applying the rules of priority of passage ☐



- **How will you act in the situation shown in the picture:**
 * I will continue to move straight through the intersection ☐
 * I will stop in front of the intersection and miss vehicle 2 ☐
 * I will stop in front of the intersection and miss vehicle 3 ☐

- **In the situation shown in the picture, the order of passing the vehicle through the intersection is:**
 ☐



- **How will you act in the situation shown in the picture:**
 - * I will continue to move straight because I have the right of way ☐
 - * I will continue to move at a reduced speed ☐
 - * I will stop in front of the intersection and miss the vehicles from the opposite direction ☐

- **In the situation shown in the picture, you are obliged to act according to:**
 - * traffic lights ☐
 - * vertical traffic signals ☐
 - * the rule of passing vehicles from the right side ☐



- **In the situation shown in the picture, the order of passing the vehicle through the intersection is:**

- **At the intersection with the roundabout, the movement of vehicles is done:**
 - * in any direction ☐
 - * clockwise ☐
 - * counterclockwise ☐



- **How will you act in the situation shown in the picture:**
 - * I will continue to move straight because I keep the direction of movement ☐
 - * I will continue to move straight because the traffic light is not working ☐
 - * I will stop in front of the intersection ☐

- **In the situation shown in the picture, you are obliged to act:**
 - * according to traffic signs ☐
 - * according to the traffic light ☐
 - * according to the rule of passing vehicles only on the right side ☐



- **How will you act in the situation shown in the picture:**
 - * I will only vehicles coming from the right side ☐
 - * I will only miss the vehicles on the left side ☐
 - * I will stop the vehicle ☐

- **In the situation shown in the picture, the order of passage of vehicles allowed to pass is:**




In the situation shown in the picture, the driver of vehicle 1 should:

- ☐ * continue to move without passing vehicle 2
- ☐ * stop and after passing vehicle 2 continue moving.....
- ☐ * stop and change lanes in the right lane

In the situation shown in the picture, the driver of vehicle 1 will act according to:

- ☐ * the rule of passing vehicles of different categories
- ☐ * the rule of passing vehicles from the right side
- ☐ * vertical and horizontal traffic signals



How will you act in the situation shown in the picture:

- ☐ * I will pass the passenger vehicle 3 and continue moving ...
- ☐ * I will miss tram 2 and continue moving
- ☐ * I will miss tram 2 and passenger vehicle 3, so continue getting around.....

The order of passing the vehicle through the intersection is:

.....



How will you act in the situation shown in the picture:

- ☐ * I will continue to move straight
- ☐ * I will continue to move straight with the passing of vehicles 4 and 5
- ☐ * I will stop the vehicle

In the situation shown, vehicle 2 will:

- ☐ * stop and miss the vehicle 1
- ☐ * continue to move to the left without bypassing the vehicle 1
- ☐ * stop due to a sign given by an authorized person




In the situation shown in the picture, the priority of the passage has a:

- ☐ * vehicle 1 in relation to vehicle 2
- ☐ * vehicle 2 in relation to vehicle 1
- ☐ * vehicle 1 due to right side rules

In the situation shown in the picture, the order of passing the vehicle is regulated:

- ☐ * the rule of passing the vehicle on the right side
- ☐ * the rule of passing the vehicle on the left side
- ☐ * vertical traffic sign



- **How will you act in the situation shown in the picture:**
 - * I will stop in front of the intersection and miss vehicle 2 ... ☐
 - * I will continue to move straight with increased attention ... ☐
 - * I will continue to move straight without passing the vehicle 2 ☐
- **In the situation shown in the picture, the additional board indicates:**
 - * encountering the bypass ☐
 - * to move on the road with the priority of passage ☐
 - * connection with the road with priority of passage ☐



- **How will you act in the situation shown in the picture:**
 - * I will stop in front of the intersection ☐
 - * I will pass the vehicle that turns left and continue moving ... ☐
 - * I will continue to move straight ☐
- **In the situation shown in the picture, you are obliged to act:**
 - * when the traffic light is on ☐
 - * according to the vertical traffic signalization ☐
 - * by a sign given by an authorized police officer ☐



- **How will you act in the situation shown in the picture:**
 - * I will continue to move straight without passing the vehicle 1 ☐
 - * I will pass vehicle 1 and continue moving ☐
 - * I will speed up the movement and pass through the intersection before vehicle 1 ☐
- **The sign of the explicit command in the situation as in the picture has the meaning:**
 - * crossing with a road with priority of passage ☐
 - * priority in relation to vehicles from the opposite direction .. ☐
 - * mandatory stopping ☐



- **What will you do in the situation shown in the picture, if you keep the direction of travel with vehicle 2:**
 - * I will continue to move without passing the vehicle ☐
 - * I will continue to move with only vehicles passing 1 ☐
 - * I will continue to move with the passing of vehicles 3 and 4 ☐
- **In the situation shown in the picture, the order of passing the vehicle is:**

☐ ☐ ☐ ☐ ☐



- If the cyclist entered the intersection at a red light at a traffic light in the direction of his movement, as in the picture:**
- * properly performs the action of passing through the intersection ☐
 - * improper because he needs to push the bike next to him ☐
 - * improperly performs the action of passing through the intersection ☐

- In the situation shown in the picture of the cyclist, the road passes to:**
- * marked bicycle path ☐
 - * marked bicycle lane ☐
 - * marked dividing line of the pedestrian crossing ☐



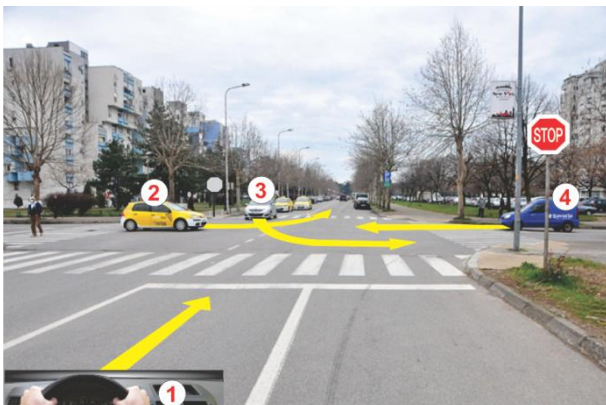
- In the situation shown in the picture:**
- * I need to keep moving to the left ☐
 - * they can get in the right lane ☐
 - * without switching lanes I will continue to move straight ☐

- In the situation shown, the arrows on the road mark:**
- * obligatory direction of movement to the left ☐
 - * purpose of traffic lanes ☐
 - * obligatory direction of movement to the right ☐




- At the intersection as in the picture:**
- * I am not obliged to miss vehicles in the roundabout ☐
 - * I am obliged to miss only vehicles that come to me with right side ☐
 - * I am obliged to miss all vehicles moving in roundabout ☐

- In the situation shown in the picture truck 2:**
- * properly turns right along the path and ☐
 - * improperly turns right ☐
 - * properly turns right along the path b ☐



- How will you act in the situation shown in the picture:**
- * I will stop in front of the intersection and miss vehicles 4 and 2 ☐
 - * I will stop in front of the intersection and miss all the vehicles ☐
 - * I will miss only vehicle 3 ☐

- In the situation shown in the picture, the order of passing the vehicle through the intersection is:**
- ☐ ☐ ☐ ☐



- **How will you act in the situation shown in the picture:**
 - * I will pass vehicle 2 and continue to move to the left ☐
 - * I will continue to move to the left without passing vehicle 2 ☐
 - * I will accelerate the movement of the vehicle and pass in front of the vehicle 2 ☐
- **In the situation shown in the picture, vehicle 2 is moving:**
 - * properly trajectory a ☐
 - * properly by trajectory b ☐
 - * properly closer to the right edge of the road ☐



- **How will you act in the situation shown in the picture:**
 - * I will continue to move straight through the intersection ☐
 - * I will stop in front of the intersection and continue moving straight ☐
 - * I will continue to move to the left through the intersection .. ☐
- **In the situation shown in the picture, the arrows on the road indicate:**
 - * obligatory direction ☐
 - * purpose of traffic lanes ☐
 - * signpost ☐



- **How will you act in the situation shown in the picture:**
 - * I will stop and miss the vehicle 3 ☐
 - * I will continue to move straight behind the vehicle 2 ☐
 - * I will reduce my speed and miss the vehicle 3 ☐
- **In the situation shown in the picture, the towing vehicle 3 is a tractor, and the towed vehicle is:**
 - * trailer ☐
 - * light trailer ☐
 - * semi-trailer ☐



- **In the situation as in the picture:**
 - * I will continue to move to the right ☐
 - * I will stop in front of the intersection ☐
 - * I will continue to move straight ☐
- **In the situation shown in the picture, you will proceed following:**
 - * illuminated traffic sign ☐
 - * vertical traffic sign ☐
 - * horizontal markings ☐



- **How will you act in the situation shown in the picture:**
 - * I will continue to move straight ☐
 - * I will stop the vehicle ☐
 - * I will continue to move to the left after passing vehicles 2 and 3 ☐
- **In the situation shown in the picture, the police vehicle:**
 - * can continue to move straight ☐
 - * must be stopped ☐
 - * can continue moving in any direction ☐



- **How will you act in the situation shown in the picture, if the vehicles keep the direction of movement and you are driving vehicle 2:**
 - * I will continue to move without passing the vehicle ☐
 - * I will continue to move after passing only vehicles 3 and 4 ☐
 - * I will continue to move with the vehicle leaving 1 ☐
- **In the situation in the picture when the vehicles keep the direction of movement, the order of passing the vehicle is:**

.....


☐



- **How will you act in the situation shown in the picture:**
 - * I will continue to move to the left without stopping through the intersection ☐
 - * I will stop in front of the intersection ☐
 - * I will continue to move straight through the intersection ☐
- **In the situation shown in the picture, the yellow light on the traffic light means:**
 - * prohibition of passage only right ☐
 - * free passage only right ☐
 - * prohibition of passage through the intersection ☐



- **In the situation shown in the picture, the passenger vehicle 1 turns left and the tractor 2 maintains the direction of travel. The right of passage has a:**
 - * tractor 2 because it has the yellow rotating light on ☐
 - * tractor 2 because it maintains the direction of movement ... ☐
 - * passenger vehicle 1 ☐
- **While driving on the tractor there may be:**
 - * driver and one person ☐
 - * driver only ☐
 - * driver and two persons ☐



- **In the situation as in the picture:**
 - * I will continue to move to the left through the intersection .. ☐
 - * I will continue to move to the right through the intersection ☐
 - * I will continue to move straight through the intersection ☐

- **Horizontal road markings mean:**
 - * purpose of traffic lanes ☐
 - * obligatory direction ☐
 - * routing lines ☐

How will you act in the situation as in the picture, when vehicle 2 turns on from the dirt road to the road:

- - * I will change to the left lane, so as not to interfere driver of vehicle 2 to turn on the road ☐
 - * I will continue to move straight without letting the vehicle 2 ☐
 - * I will stop and allow vehicle 2 to turn on because it is coming to me on the right side..... ☐



- **In the situation as in the picture, the traffic sign is valid until:**
 - * the curve on the road ☐
 - * the next speed limit sign ☐
 - * first intersection ☐

- **In the situation shown in the picture, truck 2 is:**
 - * stopped properly ☐
 - * parked or stopped improperly ☐
 - * parked or stopped properly ☐

- **In the situation shown in the picture, passing by vehicle 2, you perform the action of:**
 - * passing ☐
 - * changing lane ☐
 - * bypassing ☐



The action in which vehicles 1 and 2 move in opposite directions as in the picture is called:

- - * crossing ☐
 - * tour ☐
 - * passing ☐

The load on vehicle 2 exceeds for -5 m the most protruding point on the front of the vehicle, which is:

- - * allowed ☐
 - * allowed, but must be marked with a red board ☐
 - * not allowed ☐





- In the situation shown in the picture:
 - * you will speed up the movement so as not to disturb pedestrians
 - * you will not miss pedestrians, because they are not in your lane.....
 - * you will stop the vehicle and miss the pedestrians
- In the situation shown in the picture, the markings on the road mean that near the pedestrian crossing there is a:
 - * school zone
 - * signpost to school
 - * part of the road intended for parking the school bus



- In the situation shown in the picture, on the part of the road for two-way traffic, vehicle 2:
 - * may overtake
 - * may overtake, if it does not interfere with vehicles from the opposite direction
 - * must not overtake
- In the situation shown in the picture, the dividing line indicates:
 - * prohibition of crossing and trampling over this line
 - * the part of the road where trampling of this line is allowed
 - * the part of the road where crossing this line is allowed.....



- In the situation as in the picture, vehicle 1 is:
 - * properly parked
 - * properly stopped
 - * improperly stopped or parked.....
- At the entrance-exit from the yard the driver:
 - * may stop the vehicle
 - * the vehicle must not be stopped or parked
 - * may park the vehicle



- **In the situation shown in the picture of the vehicle along the right edge of the road are:**
 - * improperly stopped or parked
 - * properly stopped or parked
 - * stopped properly
- **The longitudinal solid white line, in the situation as in the picture, indicates:**
 - * the edge of the road
 - * dividing line
 - * edge line



- **In the situation shown in the picture, the cyclist moves:**
 - * properly, because there is no bicycle lane ☐
 - * improperly ☐
 - * properly along the left edge of the road ☐

- **In the situation shown in the picture, vehicle 1 is:**
 - * properly stopped ☐
 - * properly stopped or parked ☐
 - * improperly stopped or parked ☐

- **How will you act in the situation as in the picture:**
 - * I will continue to move straight without passing the passenger vehicle 2..... ☐
 - * I will miss passenger vehicle 2 because it is coming from my right side ☐
 - * I will move the vehicle to the left edge of the road ☐



- **The driver of vehicle 2 when turning left in the situation as in the picture will:**
 - * continue to move without letting moving vehicles pro. the way he encounters ☐
 - * continue to move because it has an advantage over the vehicle 1..... ☐
 - * stop the vehicle and miss all vehicles moving on the road which he encounters..... ☐



- **In the situation shown in the picture you should:**
 - * continue moving in the right lane ☐
 - * overtake a police vehicle ☐
 - * stop the vehicle ☐
- **Sign given by an authorized police officer:**
 - * binding it for all traffic participants ☐
 - * does not oblige when given from the vehicle ☐
 - * binding it only on cyclists ☐



- **In the situation shown in the picture, vehicle 1 overtakes the cyclist:**
 - * improper, because it crosses the opposite traffic lane ☐
 - * improper, because it endangers the cyclist ☐
 - * properly ☐
- **The driver of vehicle 1 after overtaking is obliged to:**
 - * to continue moving in the traffic lane with which he overtook..... ☐
 - * to return to his traffic lane and continue moving ☐
 - * to continue moving along the left edge of the road ☐



In the situation shown in the picture, faster movement of the vehicle you are driving than that of the vehicles 1 and 2 is considered:

- * the action of overtaking the vehicle ☐
- * the act of circumventing the vehicle ☐
- * is not considered an act of overtaking the other vehicle ☐

In the situation shown in the picture of vehicles 1 and 2, moving one behind the other:

- * form a convoy of vehicles and must not overtake ☐
- * form a convoy of vehicles and may overtake ☐
- * do not form a convoy of vehicles ☐



At the position shown in the picture, vehicle 1, 2, 3 and 4:

- * must not stop or park ☐
- * may stop, but not park ☐
- * may stop and park ☐

The driver of the auto-taxi transport at the entrance or exit from the garage:

- * must not stop ☐
- * may be stopped only for the entry or exit of passengers ... ☐
- * may be parked for a maximum of 15 minutes ☐



In the situation shown in the picture:

- * I must not overtake because of the markings on the road ... ☐
- * I may overtake ☐
- * I may overtake if I do not cross the lane in the opposite direction..... ☐

In the situation shown in the picture, on the road outside the settlement, the speed at which you can overtake:

- * is not limited ☐
- * is up to 80 km / h ☐
- * is up to 20 km / h more than the limit ☐



In the situation shown in the picture passenger vehicle 2:

- * rotates in a semicircle in accordance with the regulations ☐
- * properly turns left ☐
- * turns irregularly in a semicircle ☐

A longitudinal unbroken line divides the road:

- * on lanes ☐
- * on traffic lanes ☐
- * on two roadways ☐



- **In the situation shown in the picture of the cyclist:**
 - * he is moving improperly because he needs to push the bike next to him ☐
 - * moves properly ☐
 - * improperly moves through a pedestrian crossing ☐
- **In the situation shown in the picture, red wide longitudinal lines across the pedestrian crossing indicate:**
 - * bicycle paths ☐
 - * bicycle lanes ☐
 - * pedestrian running trails ☐



- **In the situation shown in the picture:**
 - * I will continue to move without letting pedestrians pass ☐
 - * I will slow down the movement of vehicles and miss pedestrians ☐
 - * I will speed up the movement of the vehicle to pass in front of pedestrians ☐



- **In the situation shown in the picture, when pedestrians cross the road they are obliged to:**
 - * cross by the shortest route ☐
 - * cross where there are the least participants in traffic..... ☐
 - * to pass the road as slowly as possible ☐
- **In the situation shown in the picture, police vehicle 2 is:**
 - * properly stopped or parked ☐
 - * improperly parked ☐
 - * improperly stopped or parked ☐
- **In the situation shown in the picture:**
 - * I must not stop or park behind the vehicle 2 ☐
 - * I am allowed to stop or park behind vehicle 2 ☐
 - * I am allowed to park next to the vehicle 2 ☐



- **In the situation shown in the picture, passenger vehicle 3 will start from the parking lot on the road:**
 - * after passing a passenger vehicle 2 ☐
 - * without passing a passenger vehicle 2 ☐
 - * without obligation to other participants in traffic ☐
- **How will you act in the situation shown in the picture:**
 - * I will stop in front of the intersection and miss the pedestrians ☐
 - * I will sound a warning to pedestrians and continue moving. ☐
 - * I will speed up the movement in order to pass before the pedestrian ☐



- In the situation shown in the picture on the road in both directions, the driver of vehicle 1 may use:
 - * both lanes ☐
 - * right lane ☐
 - * left lane ☐
- In the situation shown in the picture, the driver of vehicle 1 in the underpass:
 - * may be parked ☐
 - * must not stop or park ☐
 - * may stop at the right edge of the carriageway ☐



- In the situation shown in the picture vehicle 1:
 - * may overtake ☐
 - * it must not be overtaken due to road markings ☐
 - * must not overtake on the left ☐
- In the situation shown in the picture, the road markings mean:
 - * allowed overtaking from the opposite direction ☐
 - * allowed overtaking in the direction of movement ☐
 - * only trucks are allowed to overtake ☐



- In the situation as in the picture, when passing vehicle 2 moving from the opposite direction, the action is called:
 - * touring ☐
 - * bypassing ☐
 - * overtaking ☐
- In the situation shown in the picture:
 - * I will continue to move straight without passing the pedestrian ☐
 - * I will speed up the movement of vehicles and pass in front of pedestrians ☐
 - * I will stop and miss the pedestrian ☐



- In the situation shown in the picture:
 - * I may overtake ☐
 - * I must not overtake ☐
 - * I may overtake due to road markings ☐
- In the situation shown in the picture, the continuous longitudinal line along the right edge of the carriageway indicates:
 - * the edge of the road ☐
 - * edge line ☐
 - * dividing line ☐




- **The driver of a passenger vehicle in the situation as in the picture, should:**
 - * continue to the left without passing the truck ☐
 - * continue to move straight without passing the truck ☐
 - * stop in front of the intersection and miss the truck ☐
- **In the situation shown in the picture, the driver of the passenger vehicle will act according to:**
 - * vertical traffic signals ☐
 - * the rule of passing vehicles from the right side ☐
 - * the rule of passing vehicles of a larger category ☐



- **How will you act in the situation shown in the picture:**
 - * I will stop the vehicle and miss the pedestrians ☐
 - * I will continue to move without letting pedestrians pass ☐
 - * I will siren to warn pedestrians and continue to move ☐
- **In the situation shown in the picture, the cross markings on the pavement indicate:**
 - * pedestrian crossing ☐
 - * pedestrian island ☐
 - * footpath ☐




- **Vehicle 1 in the situation shown in the picture is moving:**
 - * improperly ☐
 - * properly in mid-August ☐
 - * properly, because the left lane is occupied by vehicle 2 ... ☐
- **In the situation as in the picture passenger vehicle 2:**
 - * may stop or park ☐
 - * may stop ☐
 - * must not stop or park ☐



- **In the situation as in the picture passenger vehicle 1:**
 - * may park ☐
 - * must not stop or park ☐
 - * may stop ☐
- **At what distance from the marked pedestrian crossing can the driver stop or park:**
 - * at least - meters ☐
 - * at least 5 meters ☐
 - * at least 7 meters ☐



- **In the situation shown in the picture, vehicle 2 is moving:**
 - * properly, if it does not interfere with vehicles from the opposite direction..... ☐
 - * properly ☐
 - * improperly ☐
- **In the situation shown in the picture, the driver of vehicle 2 should:**
 - * moves as close as possible to the dividing line ☐
 - * moves as close as possible to the right edge of the road ☐
 - * moves in the middle of the traffic lane ☐



- **In the situation shown in the picture, you will go through the intersection:**
 - * path 1 without passing pedestrians ☐
 - * path 2 after passing pedestrians ☐
 - * path 1 after passing pedestrians ☐
- **In the situation as in the picture vehicle 3:**
 - * may be stopped ☐
 - * must not stop or park ☐
 - * may be stopped or parked ☐



- **In the situation shown in the picture:**
 - * I may overtake the passenger vehicle ☐
 - * I can't, because the road is in the left curve ☐
 - * I am not allowed, because the markings on the road are forbidden ☐
- **In the situation shown in the picture, the dividing dashed line:**
 - * separates the road and must not cross it ☐
 - * separates the road and may be trampled and crossed ☐
 - * distributes the carriageway and must not cross it..... ☐




- **How will you act in the situation as in the picture, when you are overtaken by a passenger vehicle 2:**
 - * increase the speed of movement ☐
 - * I will move the vehicle to the right edge of the road ☐
 - * I will move the vehicle to the left edge of the road ☐
- **The sign of the explicit command shown in the picture is valid:**
 - * to the first intersection ☐
 - * until the first sign of notification ☐
 - * up to the first sign of danger ☐



- **In the situation shown in the picture, the driver of the truck 1 should:**
 - * accelerate the vehicle and continue moving without passing pedestrians ☐
 - * miss only the pedestrian marked with a and continue moving ☐
 - * stop and miss all pedestrians ☐
- **In the situation shown in the picture, the driver of the truck 1 immediately after passing the pedestrian crossing:**
 - * may stop or park ☐
 - * may stop ☐
 - * must not stop or park ☐



- **In the position shown in the picture passenger vehicle 1 is:**
 - * properly stopped ☐
 - * properly stopped or parked ☐
 - * improperly stopped or parked ☐
- **The notification symbol shown in the picture is:**
 - * parking distance ☐
 - * parking time limit ☐
 - * parking only at certain times ☐



- **Passenger vehicle 2 as in the picture:**
 - * must not stop or park ☐
 - * may stop and park ☐
 - * may be stopped ☐
- **In the situation shown in the picture:**
 - * I must not stop or park ☐
 - * I am allowed to stop or park ☐
 - * I am not allowed to park ☐



- **In the situation shown in the picture, vehicle 1 overtakes the cyclist:**
 - * Properly, because the left turn signal is on ☐
 - * properly, because there is no sign prohibiting overtaking ☐
 - * improperly due to crossing a continuous line ☐
- **The cyclist in the situation pictured in the settlement moves:**
 - * improper, because it should move on the sidewalk ☐
 - * improper, because he should wear a protective helmet ☐
 - * properly along the right edge of the road ☐



- In the situation in the picture, I am driving a truck with a trailer and passing truck 2, due to insufficient width of the road for safe passing:**

- * truck 2 should stop and allow me to pass..... ☐
- * I need to stop and allow the cargo vehicle 2 to pass..... ☐
- * we need to stop and agree on the order of passage..... ☐

- The traffic sign in the picture means:**


- * that road is downhill up to 6% ☐
- * that the transverse slope of the road is up to 6% ☐
- * that elevation on the road goes to up to 6% ☐

- In the situation as in the picture, the driver of the vehicle 1:**

- * may be stopped or parked ☐
- * must not stop or park ☐
- * it must not be parked, but it must be stopped ☐

- At a distance of less than five meters in front of or behind the marked pedestrian crossing, the driver with the vehicle:**

- * may stop ☐
- * may stop or park ☐
- * must not stop or park ☐



- In the situation shown in the picture:**

- * I am not obliged to miss a pedestrian ☐
- * I am obliged to turn on the siren and continue moving ☐
- * I am obliged to miss the pedestrian ☐

- To allow a pedestrian to cross the road at a pedestrian crossing in a safe manner, as in the picture:**

- * he is obliged to raise his hand and enter the pedestrian crossing ☐
- * is not obliged to make sure that it interferes with other participants ☐
- * is obliged to make sure that it does not interfere with other participants ☐



- Vehicle 1 in the position shown in the picture is:**

- * parked properly ☐
- * improperly stopped or parked ☐
- * properly stopped or parked ☐

- Vehicle 1 in the situation shown in the picture is:**

- * on the traffic lane in the direction of movement ☐
- * on the traffic lane for the opposite direction of movement ... ☐
- * in a marked parking place ☐





- **The picture shows a traffic sign:**

- * falling of the rocks
- * cracking of stones on the road
- * landslide on the road

☐
☐
☐

- **The picture shows traffic signs indicating:**

- * escalators at a distance of - meters
- * underground or above-ground pedestrian crossing at a distance of - meters
- * entrance to the garage at a distance of up to - meters

☐
☐
☐

- **The picture shows a traffic sign:**

- * mandatory use of snow chains
- * danger of snow
- * danger of ice

☐
☐
☐

- **The picture shows a traffic sign:**

- * traffic ban for all motor vehicles except motorcycles
- * traffic ban for motorcycles
- * traffic ban for motorized bicycles

☐
☐
☐

- **The picture shows a traffic sign:**

- * prohibition of turning left
- * prohibition of turning vehicles on the road
- * prohibition of semicircular turning

☐
☐
☐

- **The picture shows traffic signs indicating:**

- * ban on traffic of vehicles transporting dangerous goods at the specified time.....
- * ban on traffic of vehicles transporting bulk cargo at the specified time
- * traffic ban for trucks at the specified time

☐
☐
☐

od 17 - 05 h



- **The picture shows a traffic sign:**

- * road reserved for motor vehicle traffic
- * highway
- * road for vehicles moving 130 km / h

☐
☐
☐

- **The picture shows a traffic sign:**

- * hazard warning flag on the right
- * crosswind on the right
- * crosswind on the left

☐
☐
☐



- **The picture shows a traffic sign:**
 - * encountering the bridge ☐
 - * uneven road ☐
 - * retaining wall ☐



- **The picture shows a traffic sign:**
 - * termination of overtaking ban for lorries ☐
 - * prohibition of overtaking trucks ☐
 - * termination of overtaking ban for all motor vehicles ☐



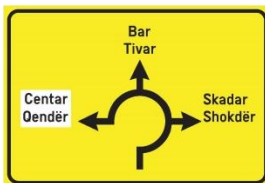
- **The picture shows a traffic sign:**
 - * terrain arranged for picnickers ☐
 - * mountain lodge and camping ground in a semi-trailer ☐
 - * camping ground under tents and trailers ☐



- **The picture shows a traffic sign:**
 - * completion of the turning lane for slow vehicles ☐
 - * traffic lane for slow vehicles ☐
 - * obligatory passing of slow vehicles on the right side ☐



- **The picture shows a traffic sign:**
 - * animals on the road ☐
 - * game on the road ☐
 - * hunting ground ☐



- **The picture shows a traffic sign:**
 - * roundabout traffic ☐
 - * roundabout direction..... ☐
 - * roundabout ☐



- **The picture shows traffic signs indicating:**
 - * the proximity of a section of road on which there is snow ☐
 - * the proximity of the section of the road on which the snow is cleaned by machine ☐
 - * proximity to the section of the road where there is ice and ice ☐



- **The picture shows a traffic sign:**
 - * priority of passage in relation to vehicles from the opposite direction ☐
 - * priority of passage for vehicles from the opposite direction ☐
 - * traffic in both directions ☐



- **The picture shows a traffic sign:**
 - * speed limit ☐
 - * recommended speed ☐
 - * minimum permitted speed ☐



- **The picture shows a traffic sign:**
 - * crossing of roads with priority of passage ☐
 - * encountering a road with priority of passage ☐
 - * providing a road with priority of passage ☐



- **The picture shows a traffic sign:**
 - * roundabout ☐
 - * roundabout traffic ☐
 - * obligatory semicircular rotation ☐



- **The picture shows a traffic sign:**
 - * intersection of roads of equal importance ☐
 - * obligatory stop ☐
 - * crossing with a priority road ☐



- **The picture shows a traffic sign:**
 - * slow traffic zone ☐
 - * children on the road ☐
 - * children's playground ☐



- **The picture shows a traffic sign:**
 - * minimum distance between parked vehicles ☐
 - * minimum distance between vehicles ☐
 - * required distance for vehicles to pass ☐



- **The picture shows a traffic sign:**
 - * sign for the detour on the right side ☐
 - * a signpost for the exit to a certain place ☐
 - * a signpost for rearranging to move to a certain place ☐




- **The picture shows a traffic sign:**
 - * overtaking ban for lorries ☐
 - * prohibition of overtaking for all motor vehicles ☐
 - * prohibition of overtaking trucks ☐



- **The picture shows traffic signs indicating:**
 - * allowed to turn left at the indicated time ☐
 - * prohibition of semicircular rotation at the specified time ☐
 - * prohibition of turning left at the indicated time ☐



- **The picture shows a traffic sign:**
 - * obligatory direction first to the right, then to the left and exit from the intersection ... ☐
 - * road with one-way traffic with obligatory turning right and left ☐
 - * the direction of movement of the vehicle it intends to turn left at the intersection where turning left is prohibited..... ☐



- **The picture shows a traffic sign:**
 - * road with priority of passage ☐
 - * completion of the road with priority of passage ☐
 - * providing a road with priority of passage ☐



- **The picture shows a traffic sign:**
 - * trolleybus line ☐
 - * tram line ☐
 - * rail vehicle on the road ☐



- **The picture shows a traffic sign:**
 - * narrowing of the road on the right side ☐
 - * narrowing of the road on the left ☐
 - * the right lane is not in the direction ☐



- **The picture shows a traffic sign:**
 - * traffic ban for vehicles not exceeding a certain length ☐
 - * traffic ban for vehicles exceeding a certain length ☐
 - * traffic ban for cargo motor vehicles up to - meters long ☐



- **The picture shows traffic signs indicating:**
 - * minimum speed in the length of the road of 2000 meters ☐
 - * speed recommended in the length of the road of 2000 meters ☐
 - * minimum permitted speed after 2000 meters ☐



- **The picture shows traffic signs indicating a ban on traffic for motor vehicles towing:**
 - * light trailer at the specified time ☐
 - * a semi-trailer at the specified time ☐
 - * trailer at the specified time ☐



- **The picture shows a traffic sign:**
 - * mandatory exit in case of danger ☐
 - * distance of exit in case of danger ☐
 - * signpost for pedestrians ☐



- **The picture shows a traffic sign:**
 - * start of the traffic lane for slow vehicles ☐
 - * completion of the traffic lane for slow vehicles ☐
 - * completion of the traffic lane for forced stopping ☐



- **The picture shows a traffic sign:**
 - * traffic ban for tarpaulin vehicles ☐
 - * encountering an uneven road ☐
 - * traffic ban for cisterns ☐



- The picture shows a traffic sign:

- * minimum permitted speed
- * speed limit
- * speed recommended

☐
☐
☐

- The picture shows a traffic sign:

- * bicycle crossing
- * a path for cyclists
- * cyclists on the road

☐
☐
☐

- The picture shows traffic signs indicating:

- * prohibition of stopping
- * prohibition of stopping and parking
- * parking ban

☐
☐
☐

- The picture shows a traffic sign:

- * obligatory direction
- * one-way road
- * permitted direction

☐
☐
☐

- The picture shows a traffic sign:

- * Preliminary evidence
- * rearrangement of vehicles with the names of populated places
- * directional board

☐
☐
☐

- The picture shows a traffic sign:

- * prohibition of overtaking all motor vehicles except motorcycles without trailers and mopeds
- * prohibition of overtaking all motor vehicles
- * prohibition of overtaking all motor vehicles, except mopeds

☐
☐
☐

- The picture shows a traffic sign:

- * crossing the road over the railway without bumpers
- * crossing the road over the railway with fenders or half-fenders
- * crossing the road over the railway without bumpers or half-bumpers

☐
☐
☐

- The picture shows a traffic sign:

- * crossing for animals on the road
- * animals on the road
- * game on the road

☐
☐
☐

- The picture shows a traffic sign:

- * traffic ban for vehicles that do not exceed a certain axle load
- * traffic ban for vehicles exceeding a certain axle load
- * traffic ban for vehicles that do not exceed the carrying capacity marked on the sign .

☐
☐
☐



- **The picture shows a traffic sign:**
 - * one-way road for trucks and trailers
 - * mandatory direction for types of vehicles that are not given on the sign
 - * bypass for certain types of vehicles

☐
☐
☐

- **The picture shows a traffic sign:**
 - * children on the road
 - * school zone
 - * pedestrian path

☐
☐
☐

- **The picture shows a traffic sign:**
 - * stones bursting
 - * unsecured bank
 - * damaged road

☐
☐
☐

- **The picture shows a traffic sign:**
 - * ban for vehicles marked with the symbol
 - * traffic ban for trucks
 - * permitted traffic for vehicles marked with the symbol

☐
☐
☐

- **The picture shows a traffic sign:**
 - * urban area
 - * industrial zone
 - * populated place

☐
☐
☐

- **The picture shows a traffic sign:**
 - * traffic ban for vehicles whose total mass does not exceed a certain mass on the sign
 - * traffic ban for vehicles whose carrying capacity exceeds a certain weight on the sign
 - * traffic ban for vehicles whose total mass exceeds a specified mass on the sign

☐
☐
☐

- **The picture shows traffic signs indicating:**
 - * obligatory direction at the indicated time
 - * obligatory turn to the left at the indicated time
 - * obligatory turn left in the period from 8 am to 6 pm

☐
☐
☐

od 18 - 08 h



- **The picture shows a traffic sign:**
 - * bicycle lane
 - * bicycle path
 - * lane for cyclists

☐
☐
☐

- **The picture shows a traffic sign:**
 - * road works
 - * elimination of landslides on the road
 - * works on removing stones on the road

☐
☐
☐



- **The picture shows traffic signs indicating:**
 - * parking on the sidewalk across the road axis ☐
 - * parking on the sidewalk perpendicular to the longitudinal axis of the road ☐
 - * parking on the sidewalk parallel to the longitudinal axis of the carriageway ☐

- **The picture shows a traffic sign:**
 - * number of the international route ☐
 - * regional road number ☐
 - * number of the main road ☐

- **The picture shows a traffic sign:**
 - * signpost for populated places ☐
 - * exit sign ☐
 - * directional board ☐

- **The picture shows a traffic sign:**
 - * common path for cyclists and pedestrians ☐
 - * separate paths for cyclists and pedestrians ☐
 - * traffic ban for cyclists and pedestrians ☐

- **The picture shows a traffic sign:**
 - * Prohibition of passage without stopping ☐
 - * prohibition of passage without stopping at the customs crossing ☐
 - * prohibition of passage due to toll collection ☐

- **The picture shows a traffic sign:**
 - * crossing with a priority road ☐
 - * crossing with a side road ☐
 - * mandatory stopping ☐

- **The picture shows a traffic sign:**
 - * crossing the road over the railway with fenders or half-fenders ☐
 - * crossing the road over the railway without bumpers or half-bumpers ☐
 - * approaching the road crossing over the railway ☐

- **The picture shows a traffic sign:**
 - * pre-sign for left turn..... ☐
 - * directional board..... ☐
 - * signpost..... ☐

- **The picture shows a traffic sign:**
 - * prohibition to stop the vehicle ☐
 - * stopped vehicles on the road ☐
 - * colon of stopped vehicles ☐

- **The picture shows a traffic sign:**
 - * Andrejin krst (saltire) with one and a half tracks ☐
 - * Andrejin krst (saltire) with two or more tracks ☐
 - * Andrejin krst (saltire) with one or more tracks ☐



- **The picture shows a traffic sign:**

- * dangerous section of road
- * danger on the road
- * danger of landslides in the length of 300 m

☐
☐
☐


- **The picture shows a traffic sign:**

- * cessation of the minimum speed
- * termination of speed limit
- * cessation of the recommended speed

☐
☐
☐


- **The picture shows traffic signs indicating:**

- * prohibition of traffic for motor vehicles whose width exceeds the width indicated on the sign
- * traffic ban for trucks whose length exceeds the length indicated on the sign.....
- * prohibition of traffic for trucks whose width exceeds the width indicated on the sign

☐
☐
☐


- **The picture shows a traffic sign:**

- * Prohibition of movement for pedestrians on the road
- * traffic ban for pedestrians
- * prohibition of movement for pedestrians on the road outside the settlement

☐
☐
☐


- **The picture shows a traffic sign:**

- * directional board
- * sign for the tour
- * tour guide

☐
☐
☐


- **The picture shows a traffic sign:**

- * signpost for getting off the highway
- * name of the inhabited place
- * loop name

☐
☐
☐


- **The picture shows a traffic sign:**

- * signpost for the inhabited place
- * arrow signpost
- * direction sign for the inhabited place

☐
☐
☐


- **The picture shows a traffic sign:**

- * crossing from two traffic lanes to one in the same direction of movement
- * the area on the road on which two traffic lanes merge into one
- * alternated vehicle passing

☐
☐
☐


- **The picture shows a traffic sign:**

- * approaching the crossing of the road over the railway with fenders or half-fenders
- * approaching the road crossing over the railway
- * approaching the crossing over the railway line without bumpers or half-bumpers ...

☐
☐
☐



- **The picture shows a traffic sign:**
 - * overturning or slipping of the vehicle ☐
 - * slippery road ☐
 - * ice and icicles on the road ☐



- **The picture shows a traffic sign:**
 - * priority of passage in relation to vehicles from the opposite direction ☐
 - * vehicles from the opposite direction have priority of passage ☐
 - * priority of the passage of vehicles moving down a slope ☐



- **The picture shows a traffic sign:**
 - * encountering a bridge on the highway ☐
 - * highway ☐
 - * international route ☐



- **The picture shows a traffic sign:**
 - * runway ☐
 - * proximity to the airplane runway ☐
 - * proximity to the airport ☐




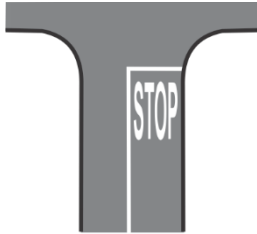
- **The picture shows a traffic sign:**
 - * lane for the movement of trucks ☐
 - * manner of using the traffic lane ☐
 - * mandatory movement of goods vehicles ☐



- **The picture shows a traffic sign:**
 - * a sign for direct regulation of traffic at the place where the works are performed. ☐
 - * regulation of traffic at the intersection by means of a flag ☐
 - * completion of the road due to the execution of works ☐



- **The picture shows a traffic sign:**
 - * prohibition of stopping ☐
 - * one-way traffic ban ☐
 - * parking ban ☐



- **Transverse road markings are:**
 - * the transverse edge of the carriageway ☐
 - * the border line of the road ☐
 - * the stop line ☐

- **If public transport vehicles use the same lane as rail vehicles, the device shown in the picture shall be used to regulate movement:**
 - * trams and buses ☐
 - * buses only ☐
 - * tram only ☐

- **The combined sign of raising the hand and using the whistle, as in the picture, is:**
 - * Prohibition of passage for all drivers ☐
 - * free passage for vehicles coming only from the side ☐
 - * prohibition of passage for vehicles coming only from the side ☐

- **The sign given by the police officer in the picture:**
 - * cannot be given with a whistle at an intersection ☐
 - * can be given with a whistle at the intersection ☐
 - * cannot be given with the STOP table ☐

- The traffic light given in the picture, when two round red lights are switched on alternately, means:
 - * prohibition of movement of the driver at the place of crossing the road over the railway ☐
 - * ban on the movement of rail vehicles ☐
 - * prohibition of movement of all participants in traffic ☐

- The picture shows a traffic light for regulating movement:
 - * bicycles only on bicycle lanes ☐
 - * bicycles and mopeds only on bicycle paths ☐
 - * bicycles and mopeds on bicycle lanes ☐

- A sign given by a police officer, as in the picture, can be given:
 - * at intersections, but only with a stop table ☐
 - * at the intersection and on the open road ☐
 - * on an open road, but only with a stop table ☐

- The sign given by the police officer in the picture means that the drivers of the vehicle:
 - * coming from his sides have the right of priority ☐
 - * those with their backs turned have the right of priority ☐
 - * continue moving in accordance with the meaning of the traffic light ☐



- A green light arrow indicates:
 - * that the driver should pay attention to the height of the vehicle
 - * the driver stops the vehicle
 - * that the driver is allowed to move
- Light signs as in the picture are used to regulate:
 - * traffic on toll plazas
 - * traffic on lanes with variable direction of movement
 - * passing through the tunnel

☐
☐
☐
☐
☐


- A vertically raised hand with the position of the police officer's hand as in the picture means:
 - * free passage for all vehicles
 - * free passage for vehicles coming from the side
 - * mandatory stopping for all participants...
- Sign given by a police officer in the picture:
 - * can be given from the vehicle
 - * can be given from the vehicle, but only with the STOP table
 - * cannot be given from the vehicle

☐
☐
☐
☐
☐


- The temporary traffic signal given in the picture signifies a:
 - * an obstacle in the way
 - * vertical barrier
 - * steering bumper

☐
☐
☐

- The displayed light signaling should be on:
 - * at night and in conditions of reduced visibility
 - * if the large flow of traffic
 - * only on local roads

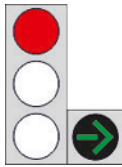
☐
☐
☐


- The position of the body of a police officer with his arms horizontally apart means that the vehicles:
 - * those with their backs turned have the right of passage
 - * coming from its side have the right of passage
 - * that all drivers are obliged to stop the vehicle
- The sign given by the police officer in the picture:
 - * can be given only at intersections
 - * can be given both at intersections and on the open road
 - * can be given only on the open road

☐
☐
☐
☐
☐


- At the marked stop, as in the picture, the driver may stop:
 - * a passenger vehicle for the purpose of entering or exiting a passenger
 - * a truck only for loading or unloading
 - * public passenger transport vehicles

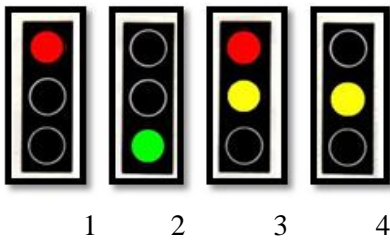
☐
☐
☐



- The lights on the traffic light, as in the picture, mean:
 - * that the driver can move in the direction of the arrow without interfering other road users ☐
 - * that the driver can move in the direction of the arrow without paying attention to other road users..... ☐
 - * prohibited movement in the direction indicated by the supplementary green arrow..... ☐



- A police officer gives a sign from the vehicle, as in the picture:
 - * in accordance with the regulations ☐
 - * contrary to regulations ☐
 - * in accordance with the regulations only in the populated place.. ☐
- In the situation shown in the picture, the sign given by the police officer to the driver means:
 - * to accelerate the movement of vehicles ☐
 - * to overtake from the right ☐
 - * to stop the vehicle ☐



- The picture shows the lights on the traffic light, and the order of turning on the lights is:
 - * 1-2-3-4 ☐
 - * 1-4-3-2 ☐
 - * 1-3-2-4 ☐

- At traffic lights with tricolor lights:
 - * the green light may be flashing ☐
 - * the green light cannot be flashing ☐
 - * the green light can be switched on with the red light ☐



- The position of the police officer's body as in the picture means that the vehicles:
 - * those coming from its side do not have the right of passage ☐
 - * that all drivers are obliged to stop the vehicle ☐
 - * coming from its side have the right of passage ☐

- The sign given by the police officer in the picture:
 - * can be given only at intersections ☐
 - * can be given only on the open road ☐
 - * can be given both at intersections and on the open road ☐



- The lights on the traffic light as in the picture have the following meanings:
 - * imminent cessation of the permitted movement of the vehicle in the direction of the arrows ☐
 - * imminent termination of the ban on driving and preparation for free moving the vehicle in the direction of the arrows..... ☐
 - * permitted movement to the driver in the direction of the arrows ☐

- Arrows indicating the allowed direction of movement are:
 - * black on a green background ☐
 - * green on a black background ☐
 - * red color on a green background ☐



- Horizontally extended arm, as in the picture, obliges:
 - * the driver in whose direction the signal is given to stop the vehicle . ☐
 - * all participants in traffic to speed up the movement ☐
 - * the driver in whose direction this signal is given needs to accelerate the movement of the vehicle ☐

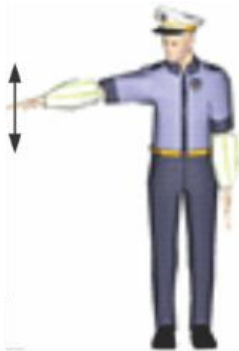


- The sign given by the police officer in the picture:
 - * can be given only at intersections ☐
 - * can be given at intersections and on the open road ☐
 - * can be given only on the open road ☐



- The picture shows a stop marking the part of the road with:
 - * prohibited traffic due to an obstacle on the road ☐
 - * prohibited traffic due to pouring from the access road ☐
 - * prohibited traffic due to the completion of the traffic lane ☐

- The picture shows:
 - * traffic light to regulate the detour on the right side ☐
 - * traffic light for regulating the passage of rail vehicles ☐
 - * traffic light for regulating the change of traffic lane ☐



- If the police officer, as in the picture, waves his hand lightly, it means that the driver in whose direction the sign is given:
 - * should reduce the speed of movement ☐
 - * should be stopped ☐
 - * should speed up the movement of ☐

- The sign given by the police officer in the picture is obligatory:
 - * only outside the settlement the driver is given that sign in the direction I hear ☐
 - * for the driver in whose direction the sign is given ☐
 - * only in the settlement to the driver in whose direction the sign is given ☐



- The picture shows:
 - * steering bumper ☐
 - * front bumper ☐
 - * roadblock ☐



- The picture shows:
 - * traffic light for regulating the movement of all participants ☐
 - * traffic light for regulating the movement of cyclists ☐
 - * traffic light for regulating the movement of pedestrians ☐



- Vertically raised arm, as in the picture means:
 - * termination of orders issued by a police officer ☐
 - * prohibition of passage for all drivers in traffic ☐
 - * that vehicles coming from the side have free passage ☐

- The sign given by the police officer in the picture:
 - * can be given only at intersections ☐
 - * can be given only on the open road ☐
 - * cannot be given at intersections ☐



- The picture shows a bowsprit that:
 - * marks the lane for slow vehicles
 - * indicates the place of opening the strip
 - * indicates the place of closing the strip

☐
☐
☐

- The picture shows:
 - * device for regulating the movement of trams
 - * device for regulating the movement of pedestrians
 - * device for marking the track orientation

☐
☐
☐

- The horizontally detached hand of a police officer, as in the picture, means that:
 - * the driver of that vehicle reduces the speed of movement
 - * the driver of that vehicle slows down the vehicle and continues to move to the left
 - * the driver of that vehicle is obliged to stop the vehicle
- The sign given by the police officer in the picture:
 - * can be given both at intersections and on the open road
 - * can be given only in a populated place
 - * can be given only on the open road

☐
☐
☐☐
☐
☐

- The following shall not be considered as equipment of motor vehicles and trailers:
 - * side mirror
 - * spare wheel
 - * spare bulbs

☐
☐
☐

- Daylight lights shall be:
 - * yellow
 - * blue
 - * white

☐
☐
☐

- The minimum tread depth on the tread of winter tires should be:
 - * 2 mm
 - * 4 mm
 - * 1,6 mm

☐
☐
☐

- The number of the police is:
 - * 124
 - * 112
 - * 122

☐
☐
☐

- In the case of an injured person, the following is first applied to the wound:
 - * alcohol
 - * water
 - * sterile gauze

☐
☐
☐

- A device on a vehicle which provides normal visibility is considered to be:
 - * fog light
 - * position light
 - * windshield

☐
☐
☐

- The direction indicator light must be:
 - * yellow ☐
 - * white ☐
 - * red color ☐

- Anti-lock braking system (ABS) is part of the system for:
 - * lighting of the road ☐
 - * power transmission ☐
 - * for braking ☐

- By immobilization we mean:
 - * placing sterile gauze on the injured part of the body ☐
 - * placing the injured part of the body at rest ☐
 - * return of the injured person to a state of consciousness ☐

- What is the heart rate in a normal healthy person:
 - * up to 60 beats per second ☐
 - * 60 to 80 beats in one minute ☐
 - * over 90 beats in one minute ☐

- An integral part of the control device is:
 - * tire ☐
 - * steering wheel ☐
 - * shock absorber ☐

- An integral part of the road lighting device on motor vehicles is:
 - * stop light ☐
 - * position light ☐
 - * reversing light ☐

- An integral part of the power transmission of a motor vehicle is:
 - * gearbox ☐
 - * steering wheel ☐
 - * parking brake lever ☐

- When immobilizing an injured person, the basic rule is:
 - * immobilize the whole body of the injured ☐
 - * immobilize two adjacent joints ☐
 - * immobilize only the joint closest to the injured site ☐

- An injured person who loses a lot of blood has:
 - * very high blood pressure ☐
 - * quite slow pulse ☐
 - * rapid and irregular breathing ☐

- On the same axle, the tires must be the same:
 - * by dimensions, load capacity, speed characteristic, type, construction, brand and type ☐
 - * only by brand, type, dimensions, load capacity, type and depth of the pattern ☐
 - * only by dimensions, brand and type ☐

- The fog lamps on a motor vehicle shall be adjusted so that the illuminated part of the straight road in front of the vehicle is not longer than:
 - * 15 meters ☐
 - * 30 meters ☐
 - * 35 meters ☐

- The head restraint must be fitted in a seat with a seat belt which:
 - * is bound in two points ☐
 - * not bound ☐
 - * is bound at three points ☐

- The number of ambulances is:
 - * 122 ☐
 - * 123 ☐
 - * 124 ☐

- When we want to stop the bleeding of an injured person, we use:
 - * iodine and sterile gauze ☐
 - * compression bandage ☐
 - * alcohol and gauze ☐

- The free travel of the steering wheel on a power-driven vehicle shall not exceed:
 - * 20 degrees ☐
 - * 30 degrees ☐
 - * 40 degrees ☐

- The following shall be installed on a motor vehicle as standard:
 - * service, auxiliary and parking brake ☐
 - * service and auxiliary brake and permanent decelerator ☐
 - * service and parking brake and permanent decelerator ☐

- The maximum permitted length of a motor vehicle other than a bus is:
 - * 8 meters ☐
 - * - meters ☐
 - * 12 meters ☐

- When driving fatigue occurs, it is necessary to:
 - * continue driving in slow motion ☐
 - * consume energy drinks and continue driving ☐
 - * take a break for rest ☐

- Bleeding in the injured is defined as:
 - * bleeding from blood vessels ☐
 - * closed fracture of the lower leg ☐
 - * blood clotting in a blood vessel ☐

- Service braking need not have:
 - * semi-trailer with three axles ☐
 - * passenger vehicle up to 750 kg own weight ☐
 - * light trailer ☐

- The fog lamp at the rear of the vehicle is:
 - * red ☐
 - * yellow color ☐
 - * white ☐

- Fenders on a motor vehicle must be so placed as to cover the width:
 - * rear wheels only ☐
 - * front wheels only ☐
 - * all wheels ☐

- A participant in a traffic accident who has suffered chest injuries is appointed:
 - * in a supine position ☐
 - * on the side ☐
 - * in a semi-sitting position ☐

- By burn we mean an injury caused by:
 - * skin inflammation ☐
 - * effects of heat ☐
 - * sting of a solid object ☐

- An integral part of an internal combustion engine is:
 - * crankshaft ☐
 - * cardan shaft ☐
 - * half shaft ☐

- Servo control device:
 - * reduces the angle of rotation of the steering wheels ☐
 - * reduces the total force of the driver when turning the steering wheel and provides ease of operation ☐
 - * reduces the diameter of the trajectory when turning the vehicle ☐

- The headlamps light shall be of:
 - * white color ☐
 - * yellow color ☐
 - * red color ☐

- Immediately after the accident, the person who participated in the accident:
 - * may consume alcoholic beverages ☐
 - * may consume sedatives for sedation ☐
 - * must not consume alcoholic beverages ☐

- If a person injured in a traffic accident is unconscious, he should:
 - * be placed in a supine position ☐
 - * be placed in a supine position on the abdomen ☐
 - * be placed in the lateral position ☐

- Vehicles fitted with windscreen wipers must also have:
 - * windshield washer sponge ☐
 - * windshield washers ☐
 - * windscreen heater ☐

- The light beam of the incident light should be:
 - * derived as left asymmetric ☐
 - * symmetrical ☐
 - * derived as right asymmetric ☐

- Exhaust gas extraction and exhaust devices must not exceed the dimensions of the vehicle:
 - * by length or width ☐
 - * by height ☐
 - * more than 0.1 meter in length ☐

- Dead spots and cold body are:
 - * states of injury due to loss of consciousness due to cold ☐
 - * a sure sign of death ☐
 - * a sure sign of fatigue ☐

- The telephone number of the fire service is:
 - * 123 ☐
 - * 122 ☐
 - * 124 ☐

- Reversing lamps for motor vehicles must be in:
 - * white color ☐
 - * red color ☐
 - * yellow ☐

- The service brake of motor vehicles should affect:
 - * all wheels ☐
 - * only on the front wheels ☐
 - * only on the rear wheels ☐

- A motor vehicle that has a maximum of eight seats in addition to the driver's seat is:
 - * bus ☐
 - * truck ☐
 - * passenger vehicle ☐

- In providing first aid in a traffic accident, the wound of the injured:
 - * should be rinsed with water ☐
 - * should be rinsed with alcohol ☐
 - * should not be rinsed with liquid ☐

- The driver is under the influence of alcohol:
 - * if the alcohol content in the body is determined to be higher than 0.3 g / kg ☐
 - * if the alcohol content of up to 0.3 g / kg is determined in the body ☐
 - * if the alcohol content of up to 0.2 g / kg is determined in the organism ☐

- From certain equipment in the bus there must be:
 - * three first aid kits ☐
 - * two first aid kits ☐
 - * one first aid kit ☐

- The following shall not be considered as light signaling devices:
 - * stop lights ☐
 - * direction indicators ☐
 - * retro reflectors ☐

- The driver uses the parking brake on the vehicle:
 - * to stop the vehicle when it encounters a sudden obstacle ☐
 - * to prevent the stopping of the stopped vehicle ☐
 - * to prevent the vehicle from starting only while it is parked in the garage ☐

- Arterial bleeding in an injured person is recognized by:
 - * slight bleeding and clotting on the injured part of the body ☐
 - * blood in jets ☐
 - * swelling and blue bruises of the injured part of the body ☐

- If a person is injured on the head and neck in a traffic accident:
 - * move the injured person as little as possible ☐
 - * place him in a sitting position ☐
 - * place him on his side in a supine position ☐



MINISTRY OF EDUCATION

***CATALOGUE OF EXAM QUESTIONS
FOR PASSING THE THEORETICAL PART
OF DRIVING TEST***

Podgorica, may 2023.

- **A tow truck is a lorry intended for towing:**
 - * trailer ☐
 - * semi-trailer ☐
 - * light trailers only ☐

- **The length of the goods vehicle, including interchangeable load-carrying bodies as well as all devices on the vehicle while driving, shall not exceed:**
 - * 12 m ☐
 - * 16,5 ☐
 - * 18 m ☐

- **The maximum permissible mass of a two-axle truck is:**
 - * 16 tons..... ☐
 - * 17 tons..... ☐
 - * 18 tons ☐

- **If the driver uses a regular daily rest in two parts, the second part must last at least:**
 - * 3 hours..... ☐
 - * 6 hours..... ☐
 - * 9 hours..... ☐

- **A driver who is part of a multi-member crew must, within 30 hours of the end of the daily or weekly rest period, take a new daily rest period of at least:**
 - * 3 hours ☐
 - * 6 hours..... ☐
 - * 9 hours..... ☐

- **During two consecutive weeks, the driver must have at least:**
 - * two regular weekly breaks, ie one regular and one shortened weekly break..... ☐
 - * two shortened weekly breaks, ie one shortened weekly break and two regular daily breaks ☐
 - * one regular weekly break, ie one shortened weekly break and three regular daily breaks ☐

- **The device in the motor vehicle for recording speed and distance traveled, as well as the time of work and rest of the driver where the data is recorded in the working memory and memory card, which allows recording data for a period of 365 days is:**
 - * analogue tachograph..... ☐
 - * digital tachograph..... ☐
 - * OBD diagnostics..... ☐

- **In road traffic, except on motorways and expressways, a motor vehicle may be accompanied by a maximum of:**
 - * one trailer for freight transport..... ☐
 - * two trailers for the transport of goods ☐
 - * three trailers for the transport of goods ☐

- **An integral part of the hydraulic braking system in motor vehicles is:**
 - * compressor ☐
 - * hydraulic motor ☐
 - * hydraulic cylinder..... ☐

- **The control device for lorries may operate:**
 - * on the front and rear wheels..... ☐
 - * only on the front wheels..... ☐
 - * only at the rear wheels ☐

- **Service braking with inertial control can be performed on trailers of maximum permissible mass up to:**
 - * 750 kg ☐
 - * 1500 kg ☐
 - * 3500 kg ☐

- **A motor vehicle which, according to its construction, devices and equipment, is intended for the transport of certain loads is:**
 - * special truck..... ☐
 - * work vehicle..... ☐
 - * working machine..... ☐
- **The mass of an empty vehicle with a full tank of fuel, prescribed equipment and accessories is:**
 - * mass of the vehicle set..... ☐
 - * vehicle mass..... ☐
 - * total mass of the vehicle..... ☐
- **The mass of the loaded set of vehicles (mass of passengers and cargo) is:**
 - * total mass of the vehicle set ☐
 - * maximum permissible vehicle mass..... ☐
 - * total mass of the vehicle..... ☐
- **Average weekly working hours of mobile workers:**
 - * cannot be longer than 68 hours..... ☐
 - * cannot be longer than 48 hours..... ☐
 - * may be longer than 60 hours..... ☐
- **The daily driving time may be extended up to:**
 - * 10 hours, but not more than 3 times during the week..... ☐
 - * 10 hours, but not more than 2 times during the week..... ☐
 - * 10 hours, but not more than 1 time during the week..... ☐
- **After an uninterrupted driving time of 4 hours and 30 minutes, the driver is obliged to take a break of at least:**
 - * 15 minutes ☐
 - * 30 minutes..... ☐
 - * 45 minutes ☐
- **Regular daily rest of the driver when used in one part must last at least:**
 - * 9 hours continuously..... ☐
 - * 10 hours continuously..... ☐
 - * 11 hours continuously..... ☐
- **The speed of a truck with a maximum permissible mass exceeding 7,500 kg is limited to:**
 - * 60 km/h..... ☐
 - * 70 km/h ☐
 - * 80 km/h ☐
- **Motor and trailer vehicles with a maximum permissible mass exceeding 5 t must have:**
 - * one wedge pad for wheels..... ☐
 - * two wedge pads for wheels..... ☐
 - * only one wedge pad for wheels..... ☐
- **The basic components that ensure the operation of the air brake are:**
 - * compressor, pressure regulator and air tanks..... ☐
 - * pump and hydraulic brake cylinder ☐
 - * hydraulic hoses and oil tank ☐
- **The liquid cooling system in a motor vehicle contains:**
 - * thermostat..... ☐
 - * compressor..... ☐
 - * oil pumps ☐

- **A vehicle intended to be towed by a motor vehicle is:**
 - * trailer..... ☐
 - * special truck..... ☐
 - * cargo motor vehicle..... ☐
- **The difference between the maximum permissible mass and the mass of the vehicle is:**
 - * mass of cargo..... ☐
 - * own weight of the vehicle ☐
 - * load capacity of the vehicle..... ☐
- **The axle load of the single driven axle of the vehicle at rest on a horizontal surface shall not exceed:**
 - * 11, 5 tons..... ☐
 - * 10 tons..... ☐
 - * 8 tons ☐
- **During two consecutive weeks, the total driving time may not exceed:**
 - * 90 hours ☐
 - * 80 hours ☐
 - * 70 hours ☐
- **If the driver uses a regular daily rest in two parts, the first part must last at least:**
 - * 7 hours..... ☐
 - * 5 hours..... ☐
 - * 3 hours..... ☐
- **During weekly working hours, the driver may have a maximum of:**
 - * 1 shortened daily break..... ☐
 - * 2 shortened daily breaks..... ☐
 - * 3 shortened daily breaks..... ☐
- **Regular weekly rest of the driver must last continuously:**
 - * 56 hours..... ☐
 - * 45 hours..... ☐
 - * 42 hours..... ☐
- **The speed of movement of goods vehicles transporting dangerous goods of class -1-poisons is limited to:**
 - * 40 km/h..... ☐
 - * 50 km/h..... ☐
 - * 60 km/h..... ☐
- **The speed limiter need not exist for lorries with a maximum permissible mass of up to:**
 - * 3,5 tons ☐
 - * 5 tons ☐
 - * 7 tons ☐
- **The fire extinguisher must be located:**
 - * only in trucks with a maximum permissible mass exceeding -5 tonnes..... ☐
 - * in all trucks..... ☐
 - * only in trucks with a mass of less than -5 tons..... ☐
- **An integral part of the power transmission system in motor vehicles is:**
 - * internal combustion engine..... ☐
 - * diferencial ☐
 - * alternator ☐

- **An interconnected group of one towing vehicle and at least one trailer participating in traffic as a whole is:**
 - * articulated bus..... ☐
 - * set of vehicles..... ☐
 - * tegljač ☐

- **The mass to which the vehicle can be loaded according to the manufacturer's declaration is:**
 - * load capacity of the vehicle..... ☐
 - * maximum permissible vehicle mass..... ☐
 - * mass of the vehicle..... ☐

- **The part of the total mass of the vehicle in the horizontal position with which the axle of the vehicle loads the road in the state of rest of the vehicle is:**
 - * total load ☐
 - * axle load..... ☐
 - * mass of the vehicle..... ☐

- **The weekly working hours of mobile workers may be extended to a maximum of:**
 - * 48 hours..... ☐
 - * 56 hours..... ☐
 - * 60 hours ☐

- **At the request of the authorized person, the driver is obliged to present the tachograph sheets, hand-made records or printouts from the digital tachograph and the driver's memory card:**
 - * for the current day and the previous 28 days.....č..... ☐
 - * for the current day and the previous 21 days..... ☐
 - * for the current day and the previous 15 days ☐

- **When performing passenger transport in public city traffic, the driver may replace the 45-minute break with:**
 - * with several breaks of at least 8 minutes..... ☐
 - * with several breaks lasting at least 10 minutes..... ☐
 - * with several breaks of at least 5 minutes..... ☐

- **Reduced daily rest within 24 hours lasts at least:**
 - * 9 hours, not more than 12 hours ☐
 - * 8 hours, not more than 10 hours..... ☐
 - * 9 hours, not more than 11 hours..... ☐

- **The speed of a truck with a maximum permissible mass not exceeding 7,500 kg is limited to:**
 - * 60 km/h..... ☐
 - * 70 km/h ☐
 - * 80 km/h ☐

- **Additional brakes-decelerators in trucks and buses are devices used for:**
 - * forced braking ☐
 - * prolonged deceleration of the vehicle..... ☐
 - * keeping the vehicle stationary..... ☐

- **The electrolyte level in the battery of a truck and bus can be replenished by:**
 - * technical water..... ☐
 - * boiled water..... ☐
 - * distilled water..... ☐

- **In case of failure of a set of vehicles on the road, the driver is obliged to:**
 - * place one safety triangle behind the vehicle..... ☐
 - * place one safety triangle in front of and behind the vehicle..... ☐
 - * place two safety triangles behind the vehicle..... ☐

- **A trailer designed to transfer the total mass over its axles to the road is:**
 - * semi-trailer with two axles..... ☐
 - * semi-trailer ☐
 - * trailer..... ☐

- **The sum of vehicle weight and vehicle load capacity is:**
 - * vehicle own weight..... ☐
 - * maximum permissible vehicle mass..... ☐
 - * total mass of the vehicle..... ☐

- **The axle load of a single drive axle of a motor vehicle at rest on a horizontal surface must not exceed:**
 - * 11, 5 tons..... ☐
 - * 10 tons..... ☐
 - * 8 tons ☐

- **Persons performing mobile activity in road transport must have a break no later than after:**
 - * 5 hours of continuous operation..... ☐
 - * 6 hours of continuous operation..... ☐
 - * 4 hours of continuous operation..... ☐

- **Weekly driving time may not be longer than**
 - * 60 hours..... ☐
 - * 56 hours ☐
 - * 58 hours ☐

- **During operation, the driver must have:**
 - * only daily rest..... ☐
 - * daily and weekly rest..... ☐
 - * weekly holiday only..... ☐

- **A driver who is part of a multi-crew within 30 hours of the end of the daily or weekly rest period must use a new daily rest period of at least:**
 - * 3 hours ☐
 - * 6 hours..... ☐
 - * 9 hours..... ☐

- **The load on a motor vehicle may exceed the farthest point on the front of the vehicle:**
 - * up to one meter..... ☐
 - * up to one and a half meters..... ☐
 - * up to half a meter..... ☐

- **Forced engine start-up must always be:**
 - * performed in the first gear of the gear lever..... ☐
 - * performed with connected batteries..... ☐
 - * performed in the neutral position of the gear lever..... ☐

- **During the towing of a defective vehicle on the towing vehicle must be included:**
 - * vehicle marking lights..... ☐
 - * all direction indicators..... ☐
 - * parking lights..... ☐

- **The service brake of motor vehicles should stop:**
 - * all wheels ☐
 - * only on the front wheels..... ☐
 - * only on the rear wheels..... ☐



- **In the situation shown in the picture, the off-road vehicle:**
 - * turns improperly because it moves in the left lane..... ☐
 - * may turn left without passing a passenger vehicle..... ☐
 - * must not turn left ☐
- **In the situation as in the picture, the additional orange dashboard on the front of the truck indicates that the vehicle is intended for transport:**
 - * hazardous substances ☐
 - * perishable substances..... ☐
 - * cargo crossing the vehicle body..... ☐



- **The picture shows a board indicating:**
 - * transport of dangerous goods above a certain amount ☐
 - * transport of cargo exceeding the most protruding point at the rear ☐
 - * transport of explosive substances above a certain amount..... ☐



- **The picture shows a traffic sign:**
 - * traffic ban for semi-trailers..... ☐
 - * traffic ban for trailers..... ☐
 - * traffic ban for cisterns..... ☐



- **On the clear part of the road, as in the situation in the picture, moving the truck backwards:**
 - * is not allowed even when it does not interfere with or endanger other participants in traffic..... ☐
 - * it is allowed on either side of the road and if it does not interfere or endangers fellow participants in traffic..... ☐
 - * is allowed only on the side of the road that leads to then moved and if it does not interfere or endanger other participants in traffic..... ☐
- **Reverse movement with reduced visibility:**
 - * it is allowed only for trucks..... ☐
 - * is not allowed..... ☐
 - * is allowed only for passenger vehicles..... ☐



- **The picture shows the boards indicating:**
 - * heavy vehicles ☐
 - * long vehicles ☐
 - * wider vehicles ☐



- **The picture shows a sign indicating:**
 - * Restriction of traffic for trucks..... ☐
 - * use of traffic lane for lane changing..... ☐
 - * restriction of the use of the traffic lane..... ☐



- **In the situation as in the picture, the truck:**
 - * must not stop or park ☐
 - * may stop or park..... ☐
 - * may stop but must not park..... ☐
- **According to the shape of the car body, the truck in the picture is:**
 - * open ☐
 - * closed ☐
 - * container ☐



- **The picture shows the board:**
 - * for marking vehicles transporting dangerous goods..... ☐
 - * for marking long vehicles ☐
 - * for marking oversized vehicles ☐



- **The picture shows a traffic sign:**
 - * ban on traffic of vehicles transporting dangerous goods..... ☐
 - * ban on traffic of vehicles transporting perishable goods..... ☐
 - * traffic ban for vehicles transporting bulk cargo ☐



- **In the situation as in the picture, the truck driver is moving in the lane in one direction:**
 - * improperly, because it moves in the left lane..... ☐
 - * properly because it moves in the left lane..... ☐
 - * properly because it does not interfere with other vehicles..... ☐
- **In the situation in the picture, the yellow-red plates on the back of the vehicle indicate**
 - * heavy vehicles over 7.5 tons ☐
 - * wider vehicles over 7.5 meters..... ☐
 - * heavy vehicles over 7.5 meters..... ☐



- **The picture shows a board indicating:**
 - * heavy trailers over -5 tons..... ☐
 - * long vehicles ☐
 - * wider vehicles ☐



- **The traffic sign in the picture indicates:**
 - * prohibition of overtaking for cargo motor vehicles..... ☐
 - * termination of overtaking prohibition for all motor vehicles ☐
 - * termination of the overtaking ban for lorries ☐



- **In the situation as in the picture when the passenger vehicle is overtaking, the driver of the truck:**
 - * may increase the speed of movement ☐
 - * is obliged to reduce the speed of movement..... ☐
 - * must not increase the speed of movement ☐

- **The speed of 80 km / h is limited for trucks with a maximum permissible mass:**
 - * is greater than 7500 kg ☐
 - * not more than 7500 kg ☐
 - * is greater than 10000 kg ☐



- **The picture shows a traffic sign:**
 - * termination of overtaking ban for freight motor vehicles..... ☐
 - * prohibition of overtaking cargo motor vehicles..... ☐
 - * overtaking ban for freight motor vehicles..... ☐



- **The picture shows a traffic sign:**
 - * prohibited traffic for trucks with a maximum permissible mass not exceeding 7.5 tons..... ☐
 - * prohibited traffic for trucks with a maximum permissible mass exceeding 7.5 tons..... ☐
 - * prohibited traffic for trucks with a vehicle weight exceeding 7.5 tons..... ☐